

CANDIDATE
NAME


--

CENTRE
NUMBER

--	--	--	--	--

CANDIDATE
NUMBER

--	--	--	--



COMPUTER SCIENCE

Paper 1 Theory

2210/12

May/June 2018

1 hour 45 minutes

Candidates answer on the Question Paper.

No Additional Materials are required.

No calculators allowed.

READ THESE INSTRUCTIONS FIRST

Write your Centre number, candidate number and name in the spaces at the top of this page.

Write in dark blue or black pen.

You may use an HB pencil for any diagrams, graphs or rough working.

Do not use staples, paper clips, glue or correction fluid.

DO NOT WRITE IN ANY BARCODES.

Answer **all** questions.

No marks will be awarded for using brand names of software packages or hardware.

Any businesses described in this paper are entirely fictitious.

At the end of the examination, fasten all your work securely together.

The number of marks is given in brackets [] at the end of each question or part question.

The maximum number of marks is 75.

This document consists of **11** printed pages and **1** blank page.

(b) Nancy wants to email the photos to Nadia.

Many of the photos are very large files, so Nancy needs to reduce their file size as much as possible.

Identify which type of compression would be most suitable for Nancy to use. Explain your choice.

Compression type

Explanation

.....

.....

.....

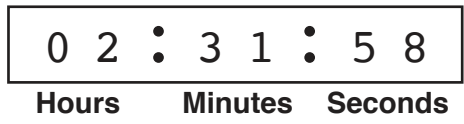
.....

.....

[4]

3 A stopwatch uses six digits to display hours, minutes and seconds.

The stopwatch is stopped at:



An 8-bit register is used to store each pair of digits.

(a) Write the 8-bit binary numbers that are currently stored for the **Hours**, **Minutes** and **Seconds**.

Hours									
Minutes									
Seconds									

[3]

(b) The stopwatch is started again and then stopped.

When the watch is stopped, the 8-bit binary registers show:

Hours	0	0	0	0	0	1	0	1
Minutes	0	0	0	1	1	0	1	0
Seconds	0	0	1	1	0	1	1	1

Write the denary values that will now be shown on the stopwatch.

	•		•
	•		•
Hours	Minutes	Seconds	

[3]

4 Jafar is using the Internet when he gets the message:

“D03, page is not available”

Jafar remembers that hexadecimal is often used to represent binary values in error codes.

Convert the hexadecimal number in the error message into 12-bit binary.

--	--	--	--	--	--	--	--	--	--	--	--

[3]

- 5 The three binary numbers in the registers X, Y and Z have been transmitted from one computer to another.

								Parity bit
Register X	1	0	0	1	0	0	1	0
Register Y	1	1	1	0	0	1	1	1
Register Z	1	1	1	0	1	0	0	1

Only **one** binary number has been transmitted correctly. This is identified through the use of a parity bit.

Identify which register contains the binary number that has been transmitted **correctly**. Explain the reason for your choice.

The binary number that has been transmitted correctly is in **Register**

Explanation

.....

.....

.....

.....

.....

.....

[4]

6 Kelvin correctly answers an examination question about the Von Neumann model.

Eight different terms have been removed from his answer.

Complete the sentences in Kelvin's answer, using the list given.

Not all items in the list need to be used.

- accumulator (ACC)
- address bus
- arithmetic logic unit (ALU)
- control unit (CU)
- data bus
- executed
- fetches
- immediate access store (IAS)
- memory address register (MAR)
- memory data register (MDR)
- program counter (PC)
- saved
- transmits

The central processing unit (CPU)

the data and instructions needed and stores them in the

..... to wait to be processed.

The holds the address of the next

instruction. This address is sent to the

The data from this address is sent to the

The instruction can then be decoded and

Any calculations that are carried out on the data are done by the

..... . During calculations, the data is temporarily


held in a register called the

[8]

7 Consider the logic statement:

$$X = 1 \text{ if } ((A \text{ is } 1 \text{ AND } B \text{ is NOT } 1) \text{ NAND } C \text{ is } 1) \text{ XOR } ((A \text{ is } 1 \text{ AND } C \text{ is } 1) \text{ OR } B \text{ is } 1)$$

(a) Draw a logic circuit to represent the given logic statement.



[6]

(b) Complete the truth table for the given logic statement.

A	B	C	Working space	X
0	0	0		
0	0	1		
0	1	0		
0	1	1		
1	0	0		
1	0	1		
1	1	0		
1	1	1		

[4]

8 Dimitri is writing a computer program in a high-level language.

He needs to send just the machine code for the program to his friend, electronically.

It is important that the program is executed as quickly as possible.

Identify which translator will be most suitable for Dimitri to use. Explain your choice.

Type of translator

Explanation

.....

.....

.....

.....

.....

[4]

9 An advertisement in a magazine displays this barcode:



(a) Identify this type of barcode.

..... [1]

(b) Explain how the data stored in this barcode is read.

.....

.....

.....

.....

.....

.....

.....

.....

[4]

10 Alexandra has a new mobile device.

It has a touch screen that uses capacitive technology.

(a) Describe how a capacitive touch screen registers Alexandra's touch.

.....
.....
.....
.....
.....
.....
.....
..... [4]

(b) Alexandra is wearing gloves because it is cold.

She presses an icon on her touch screen but her action is not registered.

(i) Explain why the touch screen will not register her touch.

.....
.....
.....
..... [2]

(ii) Alexandra does not want to remove her gloves.

Explain how Alexandra could use her mobile device whilst still wearing gloves.

.....
.....
.....
..... [2]

BLANK PAGE

Permission to reproduce items where third-party owned material protected by copyright is included has been sought and cleared where possible. Every reasonable effort has been made by the publisher (UCLES) to trace copyright holders, but if any items requiring clearance have unwittingly been included, the publisher will be pleased to make amends at the earliest possible opportunity.

To avoid the issue of disclosure of answer-related information to candidates, all copyright acknowledgements are reproduced online in the Cambridge International Examinations Copyright Acknowledgements Booklet. This is produced for each series of examinations and is freely available to download at www.cie.org.uk after the live examination series.

Cambridge International Examinations is part of the Cambridge Assessment Group. Cambridge Assessment is the brand name of University of Cambridge Local Examinations Syndicate (UCLES), which is itself a department of the University of Cambridge.